




Nom : .....


Date : .....

## Lire l'heure


1/ Écris l'heure sous chaque pendule :



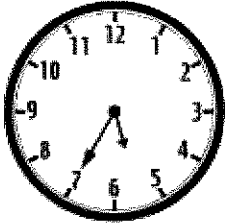
2/ Relie la montre avec l'heure indiquée :




5 heures 35 minutes




22 heures 10 minutes




17 heures 50 minutes



10 heures 15 minutes



9 heures 20 minutes



16 heures 5 minutes